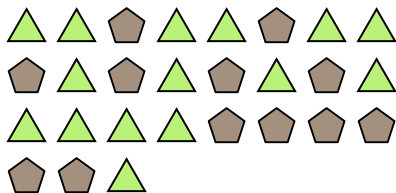





Solve each problem.

**Answers**

- Ex) What is the ratio of pentagons to triangles?




- 1) What is the ratio of circles to moons?

Ex. **12:15**

- 2) What is the ratio of stars to squares?



- 3) What is the ratio of moons to pentagons?



- 4) What is the ratio of hearts to moons?




- 5) What is the ratio of stars to triangles?



- 6) What is the ratio of moons to stars?




- 7) What is the ratio of pentagons to hearts?



- 8) What is the ratio of pentagons to stars?



- 9) What is the ratio of circles to moons?



- 10) What is the ratio of stars to moons?



- 11) What is the ratio of triangles to pentagons?



1. \_\_\_\_\_

2. \_\_\_\_\_

3. \_\_\_\_\_

4. \_\_\_\_\_

5. \_\_\_\_\_

6. \_\_\_\_\_

7. \_\_\_\_\_

8. \_\_\_\_\_

9. \_\_\_\_\_

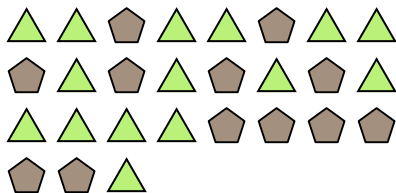
10. \_\_\_\_\_

11. \_\_\_\_\_




Solve each problem.

Ex) What is the ratio of pentagons to triangles?




1) What is the ratio of circles to moons?



2) What is the ratio of stars to squares?



3) What is the ratio of moons to pentagons?



4) What is the ratio of hearts to moons?




5) What is the ratio of stars to triangles?



6) What is the ratio of moons to stars?




7) What is the ratio of pentagons to hearts?



8) What is the ratio of pentagons to stars?



9) What is the ratio of circles to moons?



10) What is the ratio of stars to moons?



11) What is the ratio of triangles to pentagons?

**Answers**Ex. **12:15**1. **11:11**2. **7:9**3. **3:15**4. **9:2**5. **4:11**6. **12:8**7. **8:10**8. **11:2**9. **15:11**10. **4:5**11. **11:3**