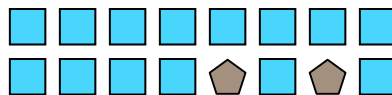


**Solve each problem.**

**Ex)** What is the ratio of moons to squares?



1) What is the ratio of squares to pentagons?



## Answers

Ex. 6:2

1. \_\_\_\_\_

2.

3.

4.

5.

6.

7.

8.

9.


10.

11.


2) What is the ratio of stars to triangles?



**3) What is the ratio of stars to triangles?**



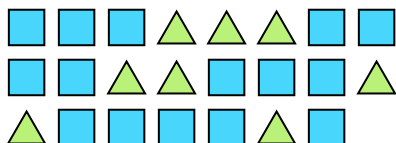
4) What is the ratio of moons to circles?




**5) What is the ratio of squares to pentagons?**



6) What is the ratio of triangles to squares? 7) What is the ratio of stars to circles?



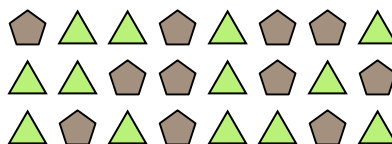
7) What is the ratio of stars to circles?



8) What is the ratio of stars to hearts?



9) What is the ratio of triangles to pentagons?



**10)** What is the ratio of circles to moons?



**11)** What is the ratio of hearts to stars?



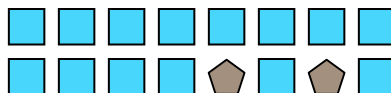


Solve each problem.

Ex) What is the ratio of moons to squares?




1) What is the ratio of squares to pentagons?




2) What is the ratio of stars to triangles?



3) What is the ratio of stars to triangles?




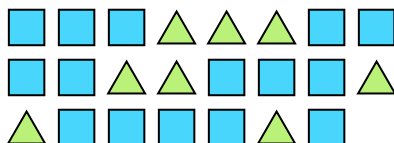
4) What is the ratio of moons to circles?



5) What is the ratio of squares to pentagons?



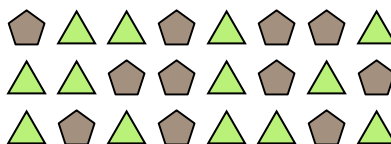
6) What is the ratio of triangles to squares? 7) What is the ratio of stars to circles?



8) What is the ratio of stars to hearts?



9) What is the ratio of triangles to pentagons?



10) What is the ratio of circles to moons?



11) What is the ratio of hearts to stars?

**Answers**Ex. **6:2**1. **14:2**2. **11:8**3. **13:12**4. **5:9**5. **4:3**6. **8:15**7. **9:15**8. **6:7**9. **13:11**10. **3:2**11. **3:9**