



Solve each problem.

Answers

Ex) What is the ratio of circles to hearts?



1) What is the ratio of squares to stars?



Ex. **10:15**

1. _____

2.

3.

4.

5.

6.

7.


8.

9.

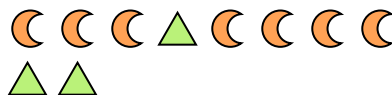
10.

11.

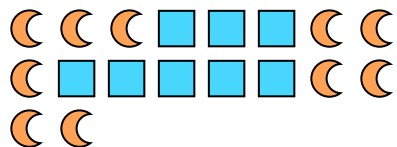
2) What is the ratio of stars to hearts?



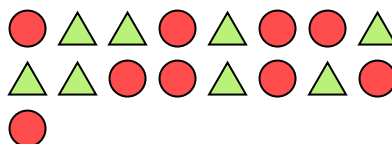
3) What is the ratio of triangles to moons?




4) What is the ratio of moons to squares?



5) What is the ratio of triangles to circles?




6) What is the ratio of circles to stars?



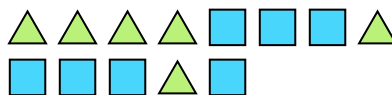
7) What is the ratio of squares to stars?




8) What is the ratio of stars to circles?



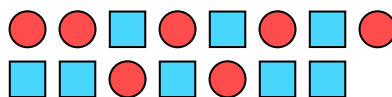
9) What is the ratio of squares to triangles?



10) What is the ratio of squares to hearts?



11) What is the ratio of circles to squares?







Solve each problem.

Answers

Ex) What is the ratio of circles to hearts?



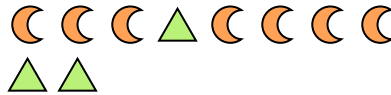
1) What is the ratio of squares to stars?

Ex. **10:15**1. **13:5**2. **6:11**3. **3:7**4. **10:8**5. **8:9**6. **12:5**7. **4:12**8. **3:9**9. **7:6**10. **10:10**11. **7:8**

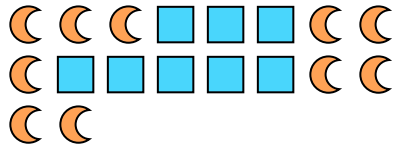
2) What is the ratio of stars to hearts?



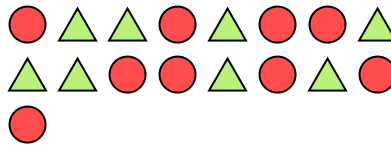
3) What is the ratio of triangles to moons?




4) What is the ratio of moons to squares?



5) What is the ratio of triangles to circles?




6) What is the ratio of circles to stars?



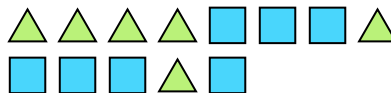
7) What is the ratio of squares to stars?



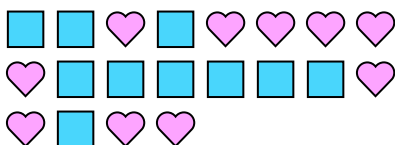
8) What is the ratio of stars to circles?



9) What is the ratio of squares to triangles?



10) What is the ratio of squares to hearts?



11) What is the ratio of circles to squares?

