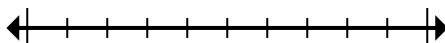




Mark the location (approximate) on the numberline and then solve.

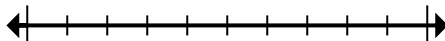
Answers

- 1) Round 14,905 to the nearest hundred.



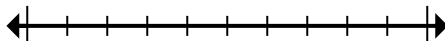
1. \_\_\_\_\_

- 2) Round 680,180 to the nearest hundred thousand.



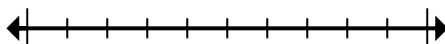
2. \_\_\_\_\_

- 3) Round 992,162 to the nearest hundred thousand.



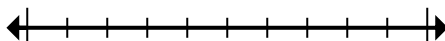
3. \_\_\_\_\_

- 4) Round 48,422,834 to the nearest hundred thousand.



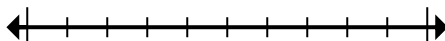
4. \_\_\_\_\_

- 5) Round 729,327 to the nearest thousand.



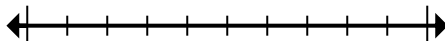
5. \_\_\_\_\_

- 6) Round 42,660 to the nearest thousand.



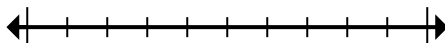
6. \_\_\_\_\_

- 7) Round 72,083,942 to the nearest hundred thousand.



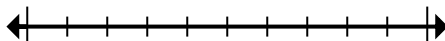
7. \_\_\_\_\_

- 8) Round 361 to the nearest hundred.



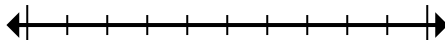
8. \_\_\_\_\_

- 9) Round 79,043 to the nearest ten thousand.



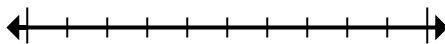
9. \_\_\_\_\_

- 10) Round 344 to the nearest hundred.



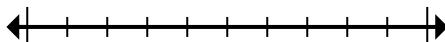
10. \_\_\_\_\_

- 11) Round 1,179 to the nearest thousand.



11. \_\_\_\_\_

- 12) Round 359,639 to the nearest hundred.

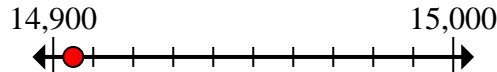


12. \_\_\_\_\_

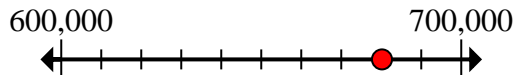


Mark the location (approximate) on the numberline and then solve.

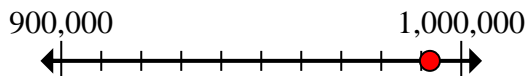
- 1) Round 14,905 to the nearest hundred.



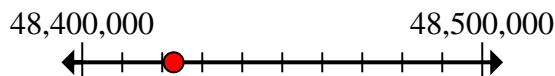
- 2) Round 680,180 to the nearest hundred thousand.



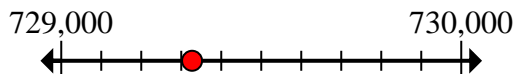
- 3) Round 992,162 to the nearest hundred thousand.



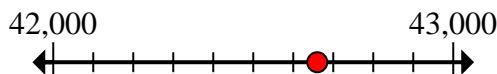
- 4) Round 48,422,834 to the nearest hundred thousand.



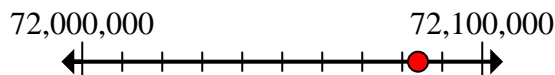
- 5) Round 729,327 to the nearest thousand.



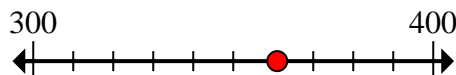
- 6) Round 42,660 to the nearest thousand.



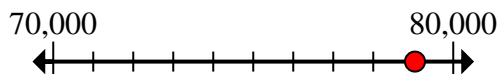
- 7) Round 72,083,942 to the nearest hundred thousand.



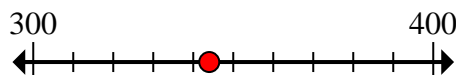
- 8) Round 361 to the nearest hundred.



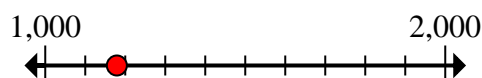
- 9) Round 79,043 to the nearest ten thousand.



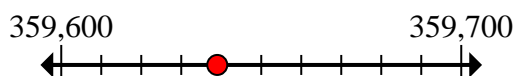
- 10) Round 344 to the nearest hundred.



- 11) Round 1,179 to the nearest thousand.



- 12) Round 359,639 to the nearest hundred.

**Answers**1. **14,900**2. **700,000**3. **1,000,000**4. **48,400,000**5. **729,000**6. **43,000**7. **72,100,000**8. **400**9. **80,000**10. **300**11. **1,000**12. **359,600**

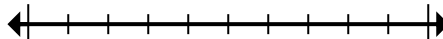


Mark the location (approximate) on the numberline and then solve.

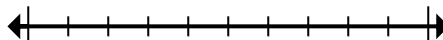
**Answers**

1,000	1,000,000	43,000	700,000
729,000	72,100,000	359,600	300
14,900	48,400,000	400	80,000

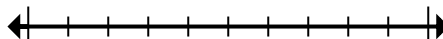
- 1) Round 14,905 to the nearest hundred.



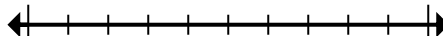
- 2) Round 680,180 to the nearest hundred thousand.



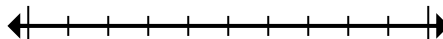
- 3) Round 992,162 to the nearest hundred thousand.



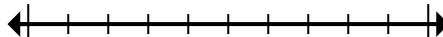
- 4) Round 48,422,834 to the nearest hundred thousand.



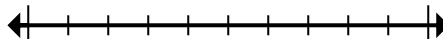
- 5) Round 729,327 to the nearest thousand.



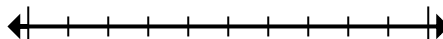
- 6) Round 42,660 to the nearest thousand.



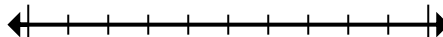
- 7) Round 72,083,942 to the nearest hundred thousand.



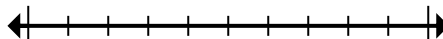
- 8) Round 361 to the nearest hundred.



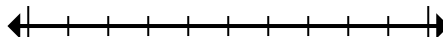
- 9) Round 79,043 to the nearest ten thousand.



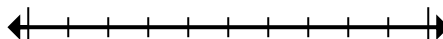
- 10) Round 344 to the nearest hundred.



- 11) Round 1,179 to the nearest thousand.



- 12) Round 359,639 to the nearest hundred.



1. \_\_\_\_\_
2. \_\_\_\_\_
3. \_\_\_\_\_
4. \_\_\_\_\_
5. \_\_\_\_\_
6. \_\_\_\_\_
7. \_\_\_\_\_
8. \_\_\_\_\_
9. \_\_\_\_\_
10. \_\_\_\_\_
11. \_\_\_\_\_
12. \_\_\_\_\_