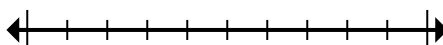




Mark the location (approximate) on the numberline and then solve.

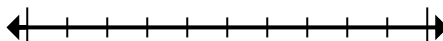
Answers

- 1) Round 4,086,973 to the nearest hundred.



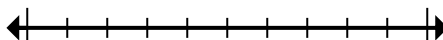
1. _____

- 2) Round 646 to the nearest hundred.



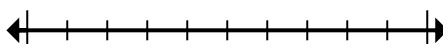
2. _____

- 3) Round 9,070,227 to the nearest hundred thousand.



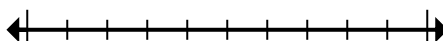
3. _____

- 4) Round 924,719 to the nearest ten thousand.



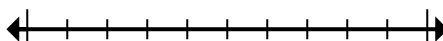
4. _____

- 5) Round 505 to the nearest hundred.



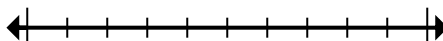
5. _____

- 6) Round 3,266 to the nearest hundred.



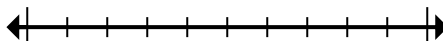
6. _____

- 7) Round 2,860 to the nearest thousand.



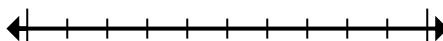
7. _____

- 8) Round 541,586 to the nearest thousand.



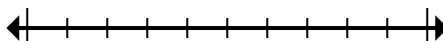
8. _____

- 9) Round 461,018 to the nearest ten thousand.



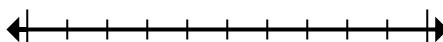
9. _____

- 10) Round 571,400 to the nearest hundred thousand.



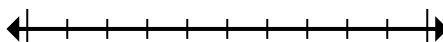
10. _____

- 11) Round 63,397,928 to the nearest hundred thousand.



11. _____

- 12) Round 225,921 to the nearest hundred thousand.

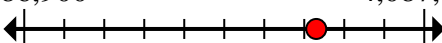













12. _____



Mark the location (approximate) on the numberline and then solve.

Answers

- 1) Round 4,086,973 to the nearest hundred.
- 4,086,900  4,087,000
- 2) Round 646 to the nearest hundred.
- 600  700
- 3) Round 9,070,227 to the nearest hundred thousand.
- 9,000,000  9,100,000
- 4) Round 924,719 to the nearest ten thousand.
- 920,000  930,000
- 5) Round 505 to the nearest hundred.
- 500  600
- 6) Round 3,266 to the nearest hundred.
- 3,200  3,300
- 7) Round 2,860 to the nearest thousand.
- 2,000  3,000
- 8) Round 541,586 to the nearest thousand.
- 541,000  542,000
- 9) Round 461,018 to the nearest ten thousand.
- 460,000  470,000
- 10) Round 571,400 to the nearest hundred thousand.
- 500,000  600,000
- 11) Round 63,397,928 to the nearest hundred thousand.
- 63,300,000  63,400,000
- 12) Round 225,921 to the nearest hundred thousand.
- 200,000  300,000

1. **4,087,000**
2. **600**
3. **9,100,000**
4. **920,000**
5. **500**
6. **3,300**
7. **3,000**
8. **542,000**
9. **460,000**
10. **600,000**
11. **63,400,000**
12. **200,000**



Mark the location (approximate) on the numberline and then solve.

Answers

3,000

63,400,000

9,100,000

460,000

600

500

542,000

4,087,000

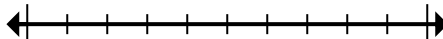
3,300

920,000

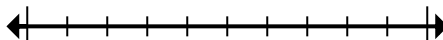
200,000

600,000

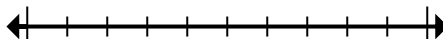
- 1) Round 4,086,973 to the nearest hundred.



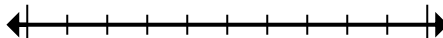
- 2) Round 646 to the nearest hundred.



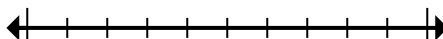
- 3) Round 9,070,227 to the nearest hundred thousand.



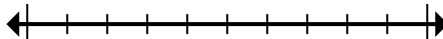
- 4) Round 924,719 to the nearest ten thousand.



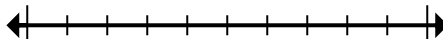
- 5) Round 505 to the nearest hundred.



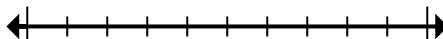
- 6) Round 3,266 to the nearest hundred.



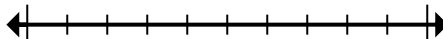
- 7) Round 2,860 to the nearest thousand.



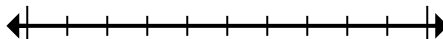
- 8) Round 541,586 to the nearest thousand.



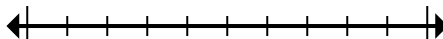
- 9) Round 461,018 to the nearest ten thousand.



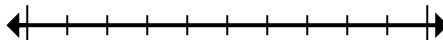
- 10) Round 571,400 to the nearest hundred thousand.



- 11) Round 63,397,928 to the nearest hundred thousand.



- 12) Round 225,921 to the nearest hundred thousand.



1. _____
2. _____
3. _____
4. _____
5. _____
6. _____
7. _____
8. _____
9. _____
10. _____
11. _____
12. _____