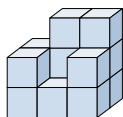




Solve each problem.

**Answers**

- 1) If you were looking at the 3d shape from the left side what would you see?



A.



B.



C.

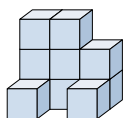


D.



1. \_\_\_\_\_

- 2) If you were looking at the 3d shape from above what would you see?



A.



B.



C.



D.



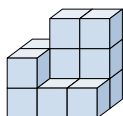
2. \_\_\_\_\_

3. \_\_\_\_\_

4. \_\_\_\_\_

5. \_\_\_\_\_

- 3) If you were looking at the 3d shape from the back what would you see?



A.



B.



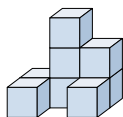
C.



D.



- 4) If you were looking at the 3d shape from the left side what would you see?



A.



B.



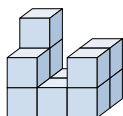
C.



D.



- 5) If you were looking at the 3d shape from the left side what would you see?



A.



B.



C.



D.

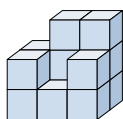




Solve each problem.

**Answers**

- 1) If you were looking at the 3d shape from the left side what would you see?



A.



B.



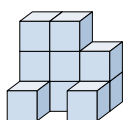
C.



D.

1. **C**

- 2) If you were looking at the 3d shape from above what would you see?



A.



B.



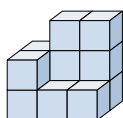
C.



D.

2. **A**3. **A**4. **C**5. **D**

- 3) If you were looking at the 3d shape from the back what would you see?



A.



B.



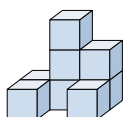
C.



D.



- 4) If you were looking at the 3d shape from the left side what would you see?



A.



B.



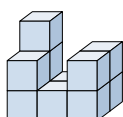
C.



D.



- 5) If you were looking at the 3d shape from the left side what would you see?



A.



B.



C.



D.

