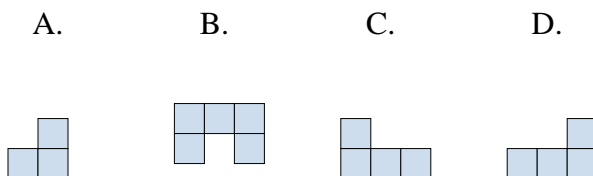
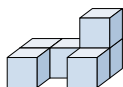




Solve each problem.

Answers

- 1) If you were looking at the 3d shape from the right side what would you see?



1. _____

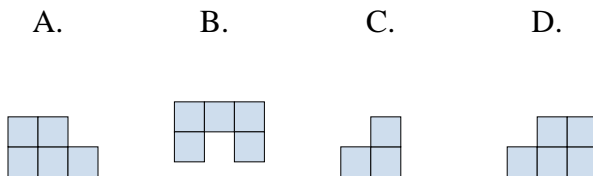
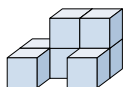
2. _____

3. _____

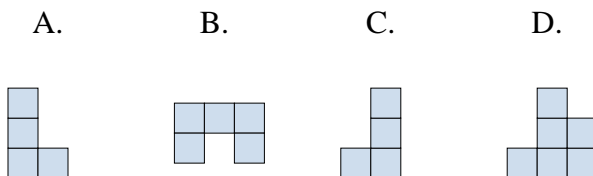
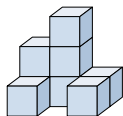
4. _____

5. _____

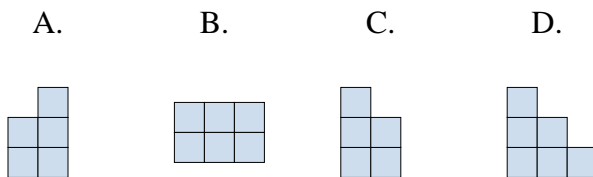
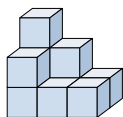
- 2) If you were looking at the 3d shape from the right side what would you see?



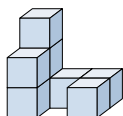
- 3) If you were looking at the 3d shape from the back what would you see?



- 4) If you were looking at the 3d shape from above what would you see?



- 5) If you were looking at the 3d shape from the right side what would you see?

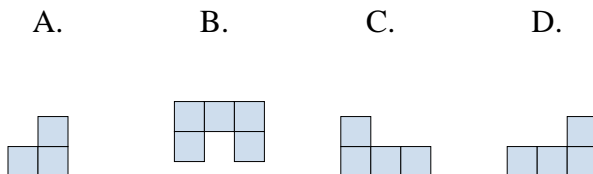
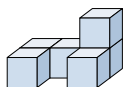




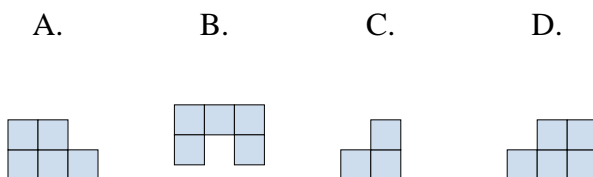
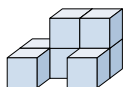
Solve each problem.

Answers

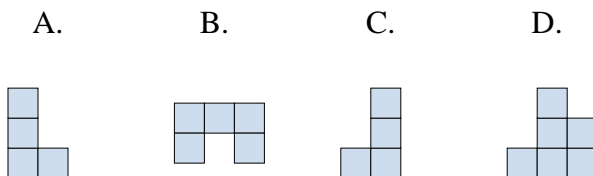
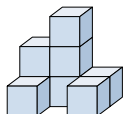
- 1) If you were looking at the 3d shape from the right side what would you see?

1. **A**2. **C**3. **D**

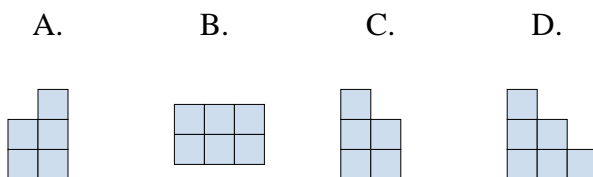
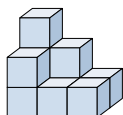
- 2) If you were looking at the 3d shape from the right side what would you see?

4. **B**5. **B**

- 3) If you were looking at the 3d shape from the back what would you see?



- 4) If you were looking at the 3d shape from above what would you see?



- 5) If you were looking at the 3d shape from the right side what would you see?

