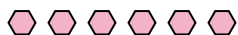




Use the visual model to solve each problem.

**Answers**

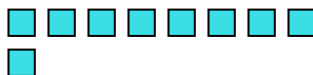
- 1) There are 6 hexagons below.



If you were to take away 1, how many would be left?

$$6 - 1 = ?$$

- 2) There are 9 squares below.



If you were to take away 7, how many would be left?

$$9 - 7 = ?$$

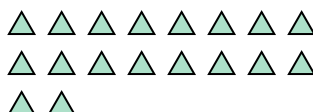
- 3) There are 2 circles below.



If you were to take away 1, how many would be left?

$$2 - 1 = ?$$

- 4) There are 18 triangles below.



If you were to take away 5, how many would be left?

$$18 - 5 = ?$$

- 5) There are 5 rectangles below.



If you were to take away 4, how many would be left?

$$5 - 4 = ?$$

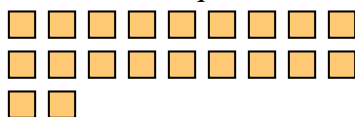
- 6) There are 3 stars below.



If you were to take away 1, how many would be left?

$$3 - 1 = ?$$

- 7) There are 20 squares below.



If you were to take away 16, how many would be left?

$$20 - 16 = ?$$

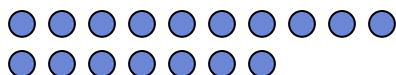
- 8) There are 6 hexagons below.



If you were to take away 4, how many would be left?

$$6 - 4 = ?$$

- 9) There are 17 circles below.



If you were to take away 10, how many would be left?

$$17 - 10 = ?$$

- 10) There are 7 rectangles below.



If you were to take away 6, how many would be left?

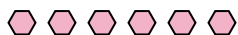
$$7 - 6 = ?$$

1. \_\_\_\_\_
2. \_\_\_\_\_
3. \_\_\_\_\_
4. \_\_\_\_\_
5. \_\_\_\_\_
6. \_\_\_\_\_
7. \_\_\_\_\_
8. \_\_\_\_\_
9. \_\_\_\_\_
10. \_\_\_\_\_



Use the visual model to solve each problem.


- 1) There are 6 hexagons below.



If you were to take away 1, how many would be left?

$$6 - 1 = ?$$

- 2) There are 9 squares below.



If you were to take away 7, how many would be left?

$$9 - 7 = ?$$

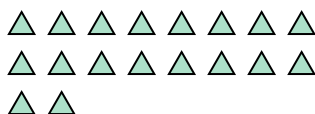
- 3) There are 2 circles below.



If you were to take away 1, how many would be left?

$$2 - 1 = ?$$

- 4) There are 18 triangles below.



If you were to take away 5, how many would be left?

$$18 - 5 = ?$$

- 5) There are 5 rectangles below.



If you were to take away 4, how many would be left?

$$5 - 4 = ?$$

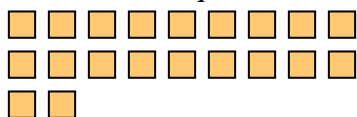
- 6) There are 3 stars below.



If you were to take away 1, how many would be left?

$$3 - 1 = ?$$

- 7) There are 20 squares below.



If you were to take away 16, how many would be left?

$$20 - 16 = ?$$

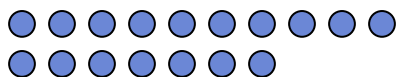
- 8) There are 6 hexagons below.



If you were to take away 4, how many would be left?

$$6 - 4 = ?$$


- 9) There are 17 circles below.



If you were to take away 10, how many would be left?

$$17 - 10 = ?$$

- 10) There are 7 rectangles below.



If you were to take away 6, how many would be left?

$$7 - 6 = ?$$

**Answers**

1. **5**
2. **2**
3. **1**
4. **13**
5. **1**
6. **2**
7. **4**
8. **2**
9. **7**
10. **1**