



Use the visual model to solve each problem.

**Answers**

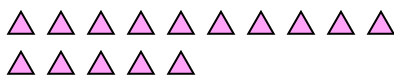
- 1) There are 13 triangles below.



If you were to take away 1, how many would be left?

$13 - 1 = ?$

- 2) There are 15 triangles below.



If you were to take away 5, how many would be left?

$15 - 5 = ?$

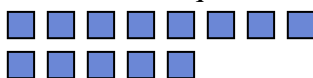
- 3) There are 11 stars below.



If you were to take away 4, how many would be left?

$11 - 4 = ?$

- 4) There are 13 squares below.



If you were to take away 4, how many would be left?

$13 - 4 = ?$

- 5) There are 6 stars below.



If you were to take away 1, how many would be left?

$6 - 1 = ?$

- 6) There are 18 stars below.



If you were to take away 10, how many would be left?

$18 - 10 = ?$

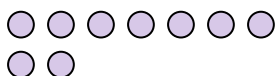
- 7) There are 10 squares below.



If you were to take away 2, how many would be left?

$10 - 2 = ?$

- 8) There are 9 circles below.



If you were to take away 3, how many would be left?

$9 - 3 = ?$

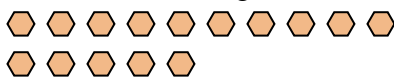
- 9) There are 5 stars below.



If you were to take away 1, how many would be left?

$5 - 1 = ?$

- 10) There are 15 hexagons below.



If you were to take away 1, how many would be left?

$15 - 1 = ?$

1. \_\_\_\_\_
2. \_\_\_\_\_
3. \_\_\_\_\_
4. \_\_\_\_\_
5. \_\_\_\_\_
6. \_\_\_\_\_
7. \_\_\_\_\_
8. \_\_\_\_\_
9. \_\_\_\_\_
10. \_\_\_\_\_



Use the visual model to solve each problem.

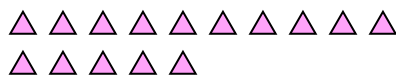
- 1) There are 13 triangles below.



If you were to take away 1, how many would be left?

$13 - 1 = ?$

- 2) There are 15 triangles below.



If you were to take away 5, how many would be left?

$15 - 5 = ?$

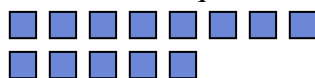
- 3) There are 11 stars below.



If you were to take away 4, how many would be left?

$11 - 4 = ?$

- 4) There are 13 squares below.



If you were to take away 4, how many would be left?

$13 - 4 = ?$

- 5) There are 6 stars below.



If you were to take away 1, how many would be left?

$6 - 1 = ?$

- 6) There are 18 stars below.



If you were to take away 10, how many would be left?

$18 - 10 = ?$

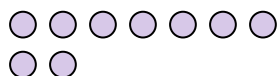
- 7) There are 10 squares below.



If you were to take away 2, how many would be left?

$10 - 2 = ?$

- 8) There are 9 circles below.



If you were to take away 3, how many would be left?

$9 - 3 = ?$

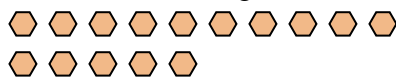
- 9) There are 5 stars below.



If you were to take away 1, how many would be left?

$5 - 1 = ?$

- 10) There are 15 hexagons below.



If you were to take away 1, how many would be left?

$15 - 1 = ?$

**Answers**1. **12**2. **10**3. **7**4. **9**5. **5**6. **8**7. **8**8. **6**9. **4**10. **14**