



Use the chart to answer each question.

| Name | Boxes of Candy Sold |
|--------|---------------------|
| Sarah | |
| Debby | |
| Olivia | |
| Jerry | |
| Victor | |
| Frank | |
| Oliver | |

Answers

1. _____

2. _____

3. _____

4. _____

5. _____

6. _____

7. _____



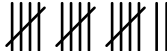




8. _____

9. _____

10. _____

- Who sold the fewest boxes?
- Who sold the greatest number of boxes?
- How many boxes of candy did Oliver sell?
- How many people sold more than 27 boxes?
- How many people sold less than 22 boxes?
- Who sold more? Frank or Oliver?
- Who sold less? Jerry or Olivia?
- How much more did Victor sell than Oliver sold?
- Who sold exactly 40 boxes?
- How much less did Olivia sell than Sarah sold?

Use the chart to answer each question.

| Name | Boxes of Candy Sold | |
|--------|---|----|
| Sarah |  | 32 |
| Debby |  | 22 |
| Olivia |  | 17 |
| Jerry |  | 49 |
| Victor |  | 40 |
| Frank |  | 48 |
| Oliver |  | 27 |

- 1) Who sold the fewest boxes?
- 2) Who sold the greatest number of boxes?
- 3) How many boxes of candy did Oliver sell?
- 4) How many people sold more than 27 boxes?
- 5) How many people sold less than 22 boxes?
- 6) Who sold more? Frank or Oliver?
- 7) Who sold less? Jerry or Olivia?
- 8) How much more did Victor sell than Oliver sold?
- 9) Who sold exactly 40 boxes?
- 10) How much less did Olivia sell than Sarah sold?

Answers

- | | |
|-----|---------------|
| 1. | Olivia |
| 2. | Jerry |
| 3. | 27 |
| 4. | 4 |
| 5. | 1 |
| 6. | Frank |
| 7. | Olivia |
| 8. | 13 |
| 9. | Victor |
| 10. | 15 |