



Determine which pictograph best represents the information in the chart.

**Answers**1) 

Month	Cats Sold
June	
July	
August	
September	
October	

2) 

Month	Cats Sold
June	
July	
August	
September	
October	

3) 

Month	Cats Sold
June	
July	
August	
September	
October	

4) 

Month	Cats Sold
June	
July	
August	
September	
October	

5) 

Month	Cats Sold
June	
July	
August	
September	
October	

6) 

Month	Cats Sold
June	
July	
August	
September	
October	

1. \_\_\_\_\_

2. \_\_\_\_\_

3. \_\_\_\_\_


4. \_\_\_\_\_

5. \_\_\_\_\_


6. \_\_\_\_\_

A. 

Month	Cats Sold
June	
July	
August	
September	
October	

Each  = 1 catB. 

Month	Cats Sold
June	
July	
August	
September	
October	

Each  = 1 catC. 


Month	Cats Sold
June	
July	
August	
September	
October	

Each  = 1 catD. 


Month	Cats Sold
June	
July	
August	
September	
October	

Each  = 1 catE. 

Month	Cats Sold
June	
July	
August	
September	
October	

Each  = 1 catF. 

Month	Cats Sold
June	
July	
August	
September	
October	

Each  = 1 cat



Determine which pictograph best represents the information in the chart.

1)

Month	Cats Sold
June	
July	
August	
September	
October	

2)

Month	Cats Sold
June	
July	
August	
September	
October	

3)

Month	Cats Sold
June	
July	
August	
September	
October	

4)

Month	Cats Sold
June	
July	
August	
September	
October	

5)

Month	Cats Sold
June	
July	
August	
September	
October	

6)

Month	Cats Sold
June	
July	
August	
September	
October	

## Answers

1. **D**

2. **B**

3. **E**

4. **F**

5. **C**

6. **A**

A.

Month	Cats Sold
June	
July	
August	
September	
October	

Each = 1 cat

B.

Month	Cats Sold
June	
July	
August	
September	
October	

Each = 1 cat

C.

Month	Cats Sold
June	
July	
August	
September	
October	

Each = 1 cat

D.

Month	Cats Sold
June	
July	
August	
September	
October	

Each = 1 cat

E.

Month	Cats Sold
June	
July	
August	
September	
October	

Each = 1 cat

F.

Month	Cats Sold
June	
July	
August	
September	
October	

Each = 1 cat