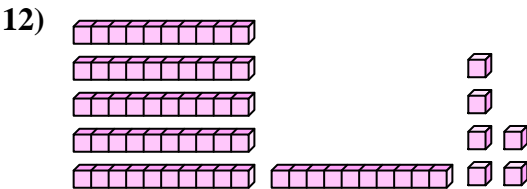
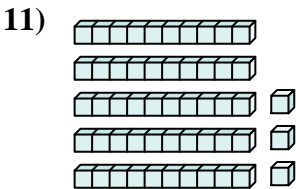
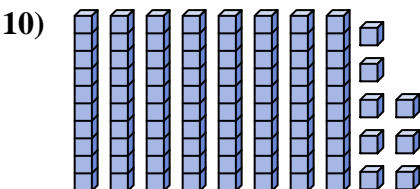
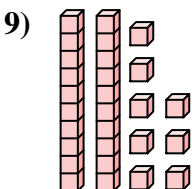
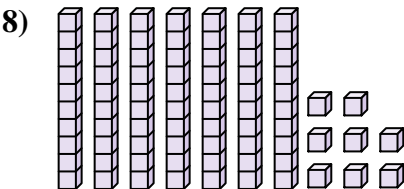
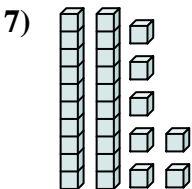
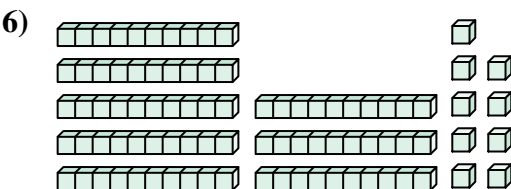

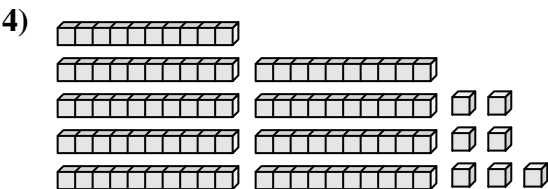
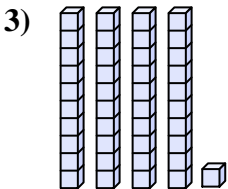
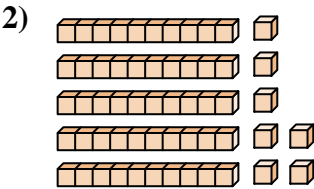
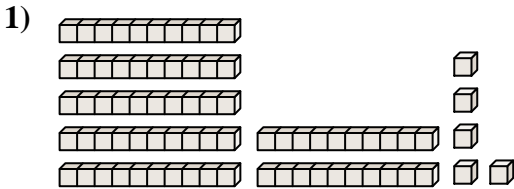




Count the total number of small blocks.

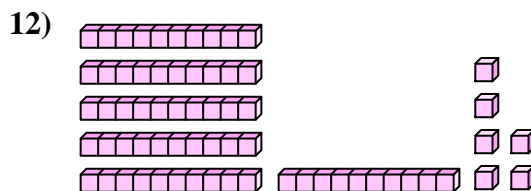
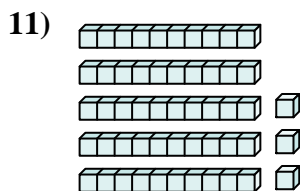
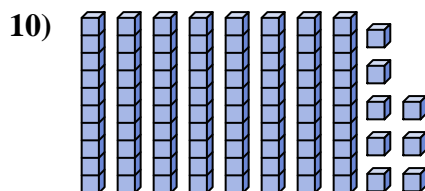
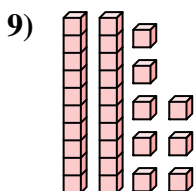
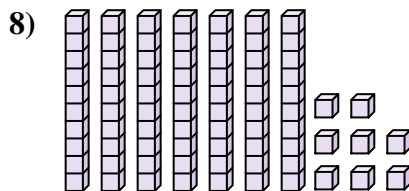
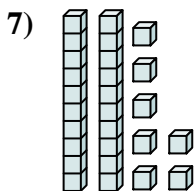
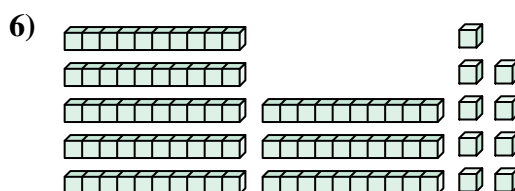

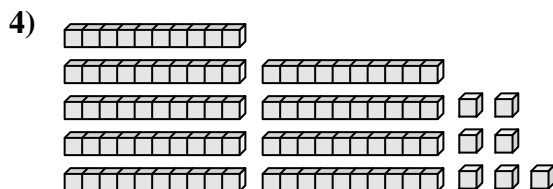
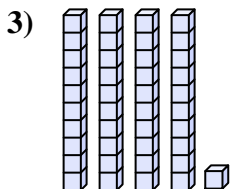
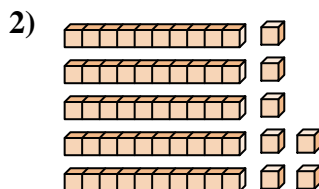
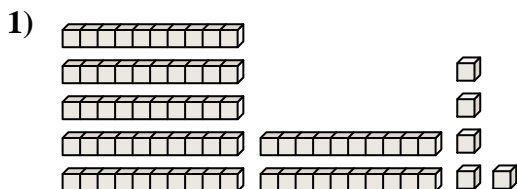
Answers



- 1. \_\_\_\_\_
- 2. \_\_\_\_\_
- 3. \_\_\_\_\_
- 4. \_\_\_\_\_
- 5. \_\_\_\_\_
- 6. \_\_\_\_\_
- 7. \_\_\_\_\_
- 8. \_\_\_\_\_
- 9. \_\_\_\_\_
- 10. \_\_\_\_\_
- 11. \_\_\_\_\_
- 12. \_\_\_\_\_



Count the total number of small blocks.

**Answers**1. **75**2. **57**3. **41**4. **97**5. **71**6. **89**7. **27**8. **78**9. **28**10. **88**11. **53**12. **66**



Count the total number of small blocks.

27

88

57

41

71

78


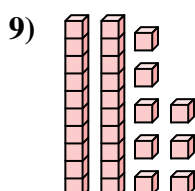
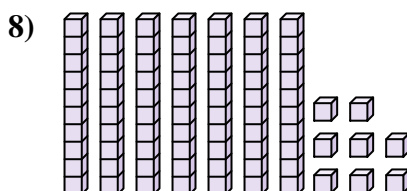
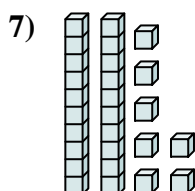
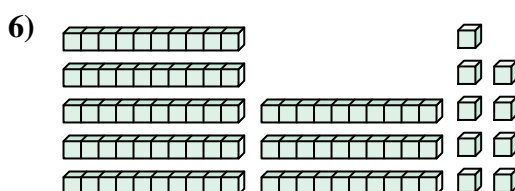

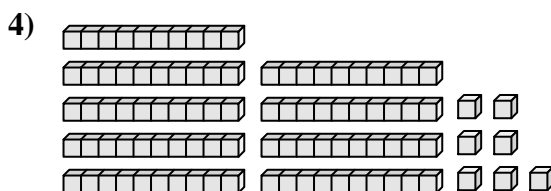
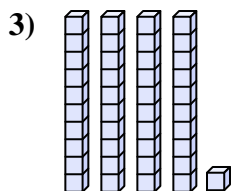
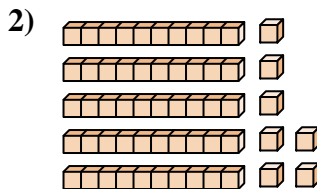
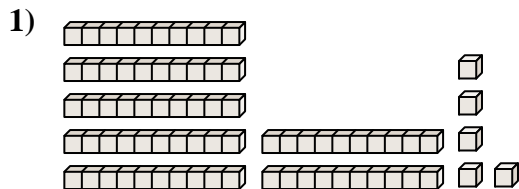
97

89

28

75

**Answers**



1. \_\_\_\_\_
2. \_\_\_\_\_
3. \_\_\_\_\_
4. \_\_\_\_\_
5. \_\_\_\_\_
6. \_\_\_\_\_
7. \_\_\_\_\_
8. \_\_\_\_\_
9. \_\_\_\_\_
10. \_\_\_\_\_