




Use the groups to answer each question.

**Answers**

- 1) a. How many groups of 100 are there?  
b. How many small blocks are there total?

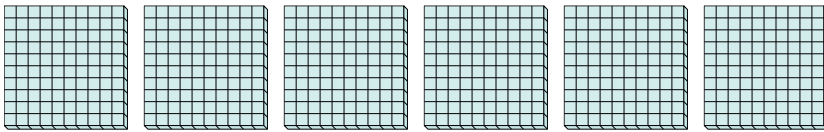


1. \_\_\_\_

2. \_\_\_\_

3. \_\_\_\_

- 2) a. How many groups of 100 are there?  
b. How many small blocks are there total?

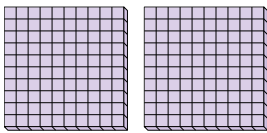


4. \_\_\_\_

5. \_\_\_\_

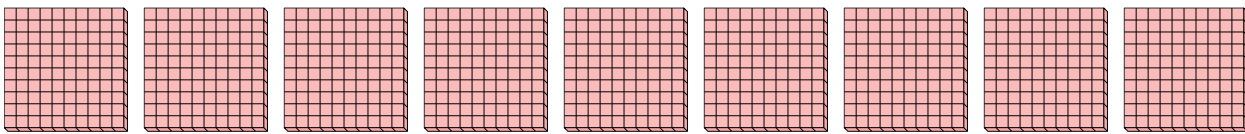
6. \_\_\_\_

- 3) a. How many groups of 100 are there?  
b. How many small blocks are there total?

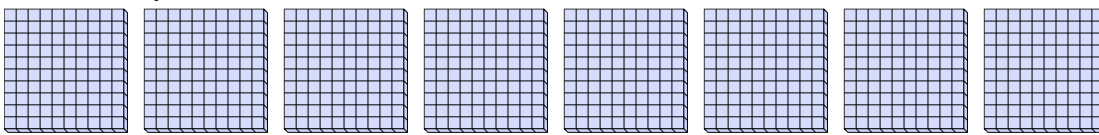


7. \_\_\_\_


- 4) a. How many groups of 100 are there?  
b. How many small blocks are there total?



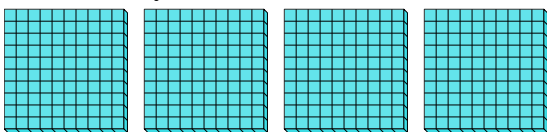
- 5) a. How many groups of 100 are there?  
b. How many small blocks are there total?



- 6) a. How many groups of 100 are there?  
b. How many small blocks are there total?



- 7) a. How many groups of 100 are there?  
b. How many small blocks are there total?






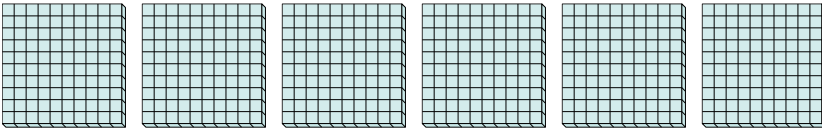
Use the groups to answer each question.

**Answers**

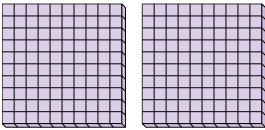
- 1) a. How many groups of 100 are there?  
b. How many small blocks are there total?

1. 3 3002. 6 6003. 2 200

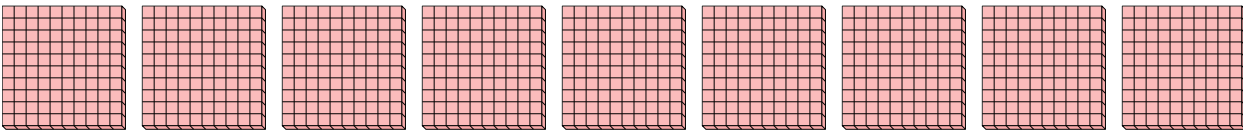
- 2) a. How many groups of 100 are there?  
b. How many small blocks are there total?

4. 9 9005. 8 800

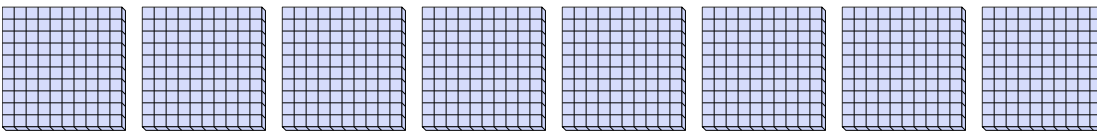
- 3) a. How many groups of 100 are there?  
b. How many small blocks are there total?

6. 1 1007. 4 400


- 4) a. How many groups of 100 are there?  
b. How many small blocks are there total?



- 5) a. How many groups of 100 are there?  
b. How many small blocks are there total?



- 6) a. How many groups of 100 are there?  
b. How many small blocks are there total?



- 7) a. How many groups of 100 are there?  
b. How many small blocks are there total?

