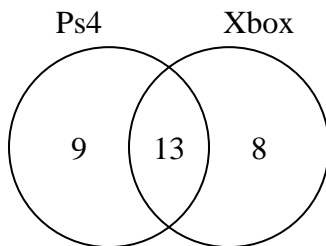




Use the diagram to solve each problem.

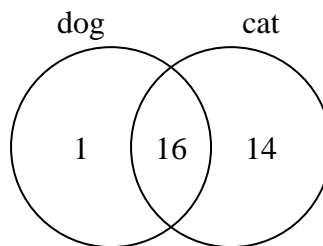
Answers

- 1) The diagram below shows the game consoles students owned.



How many people did not own both a Ps4 and a Xbox?

- 2) The diagram below shows the pets students in a class owned.



How many people had only a cat?

1. _____

2. _____

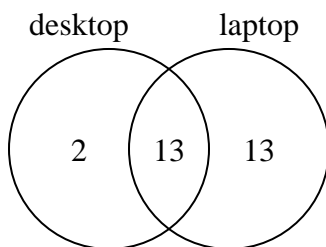
3. _____

4. _____

5. _____

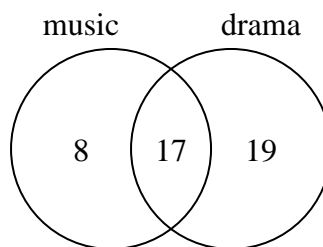
6. _____

- 3) The diagram below shows the types of computers students owned.



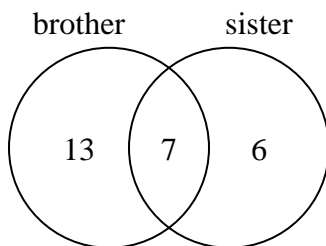
How many students owned a laptop computer?

- 4) The diagram below shows the classes students are taking.



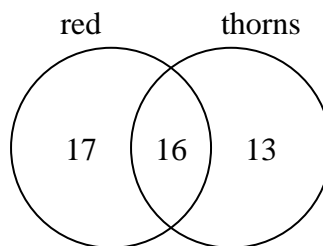
How many students are not taking both music and drama?

- 5) The diagram below shows the gender of students siblings.



How many students had both a brother and a sister?

- 6) The diagram below shows the attributes of flowers in a flower shop.

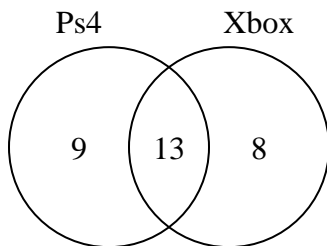


How many flowers were only red?



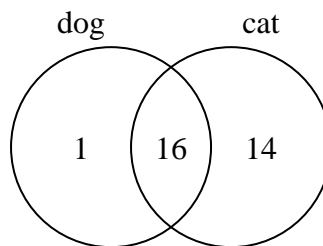
Use the diagram to solve each problem.

- 1) The diagram below shows the game consoles students owned.



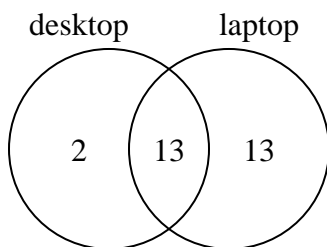
How many people did not own both a Ps4 and a Xbox?

- 2) The diagram below shows the pets students in a class owned.



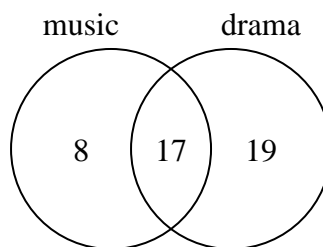
How many people had only a cat?

- 3) The diagram below shows the types of computers students owned.



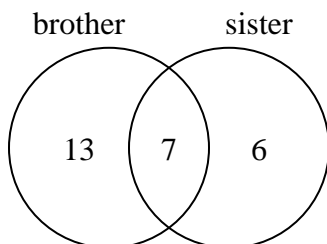
How many students owned a laptop computer?

- 4) The diagram below shows the classes students are taking.



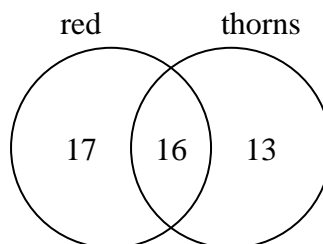
How many students are not taking both music and drama?

- 5) The diagram below shows the gender of students siblings.



How many students had both a brother and a sister?

- 6) The diagram below shows the attributes of flowers in a flower shop.



How many flowers were only red?

Answers

1. **17**
2. **14**
3. **26**
4. **27**
5. **7**
6. **17**