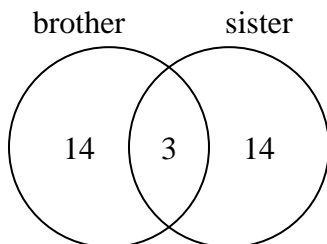




Use the diagram to solve each problem.

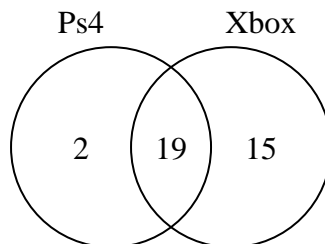
Answers

- 1) The diagram below shows the gender of students siblings.



How many students had a sister?

- 2) The diagram below shows the game consoles students owned.



How many people owned a Ps4?

1. _____

2. _____

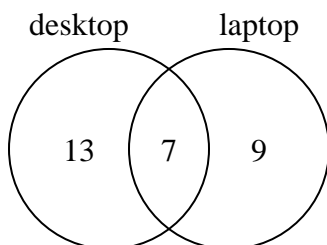
3. _____

4. _____

5. _____

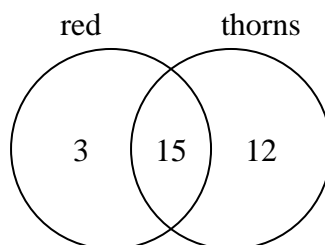
6. _____

- 3) The diagram below shows the types of computers students owned.



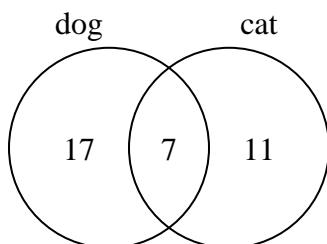
How many students owned only a desktop computer?

- 4) The diagram below shows the attributes of flowers in a flower shop.



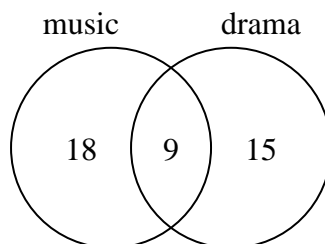
How many flowers had thorns?

- 5) The diagram below shows the pets students in a class owned.



How many people did not have both a cat and a dog?

- 6) The diagram below shows the classes students are taking.

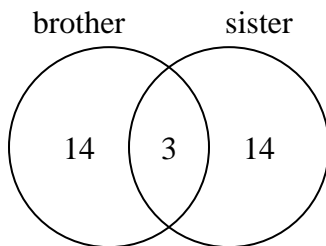


How many students are taking both music and drama?



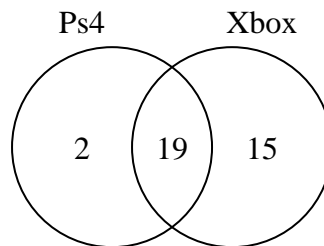
Use the diagram to solve each problem.

- 1) The diagram below shows the gender of students siblings.



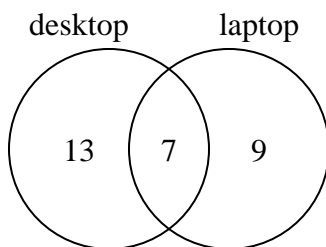
How many students had a sister?

- 2) The diagram below shows the game consoles students owned.



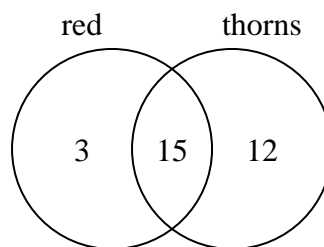
How many people owned a Ps4?

- 3) The diagram below shows the types of computers students owned.



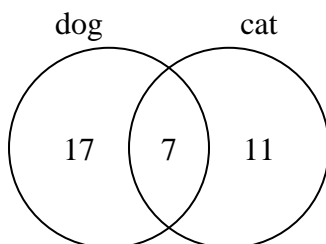
How many students owned only a desktop computer?

- 4) The diagram below shows the attributes of flowers in a flower shop.



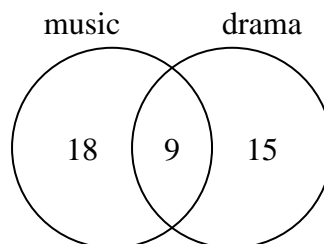
How many flowers had thorns?

- 5) The diagram below shows the pets students in a class owned.



How many people did not have both a cat and a dog?

- 6) The diagram below shows the classes students are taking.



How many students are taking both music and drama?

Answers

1. **17**
2. **21**
3. **13**
4. **27**
5. **28**
6. **9**